

**I КЛАС**

1 ЗАДАЧА (7 . 2 = 14 ТОЧКИ)

$$\square + 5 = 7$$

$$8 - \square = 3$$

$$2 + \square = 9$$

$$4 + \square = 8$$

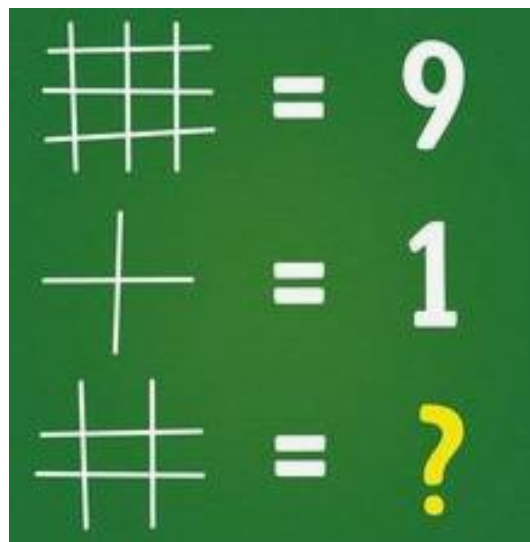
$$4 - \square = 0$$

$$\square + 3 = 6$$

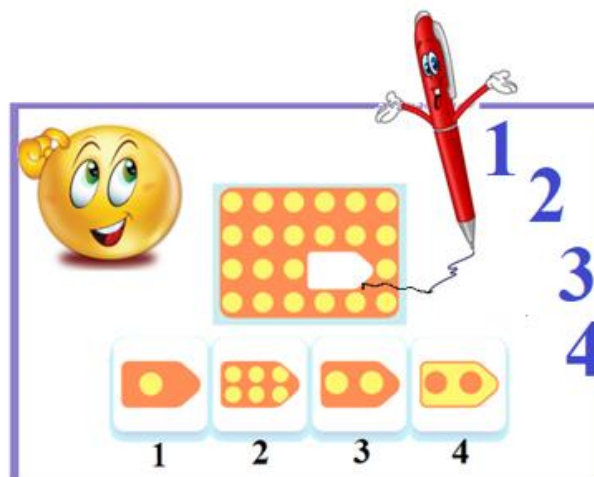
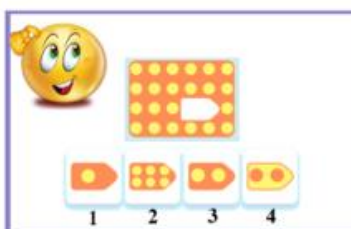
$$\square - 3 = 6$$




2 ЗАДАЧА (7 ТОЧКИ)



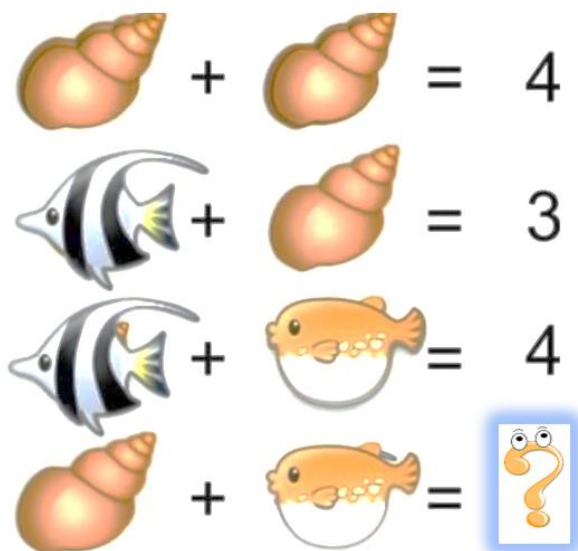
3 ЗАДАЧА (6 ТОЧКИ)



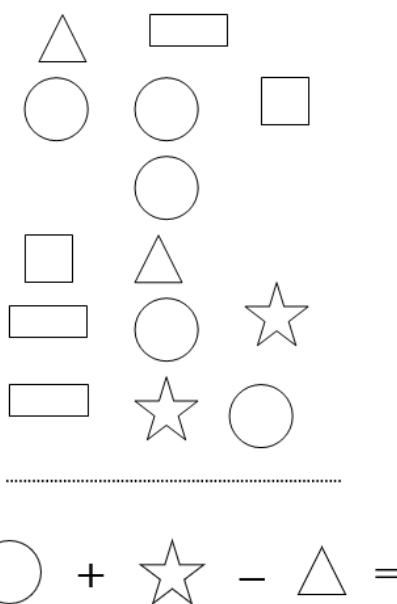
4 ЗАДАЧА (2 . 3 = 6 ТОЧКИ)



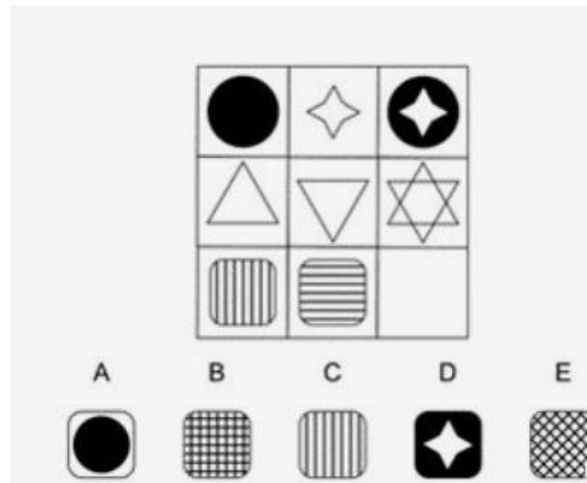
5 ЗАДАЧА (6 ТОЧКИ)



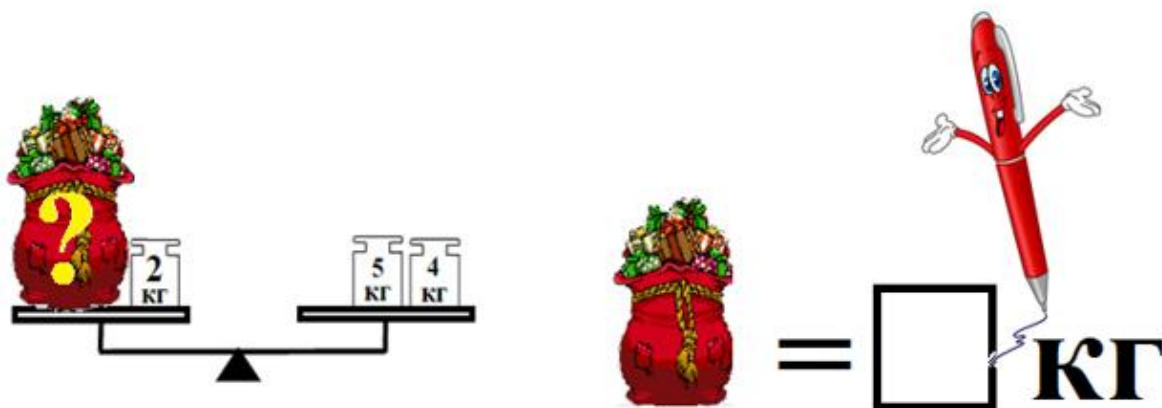
6 ЗАДАЧА (6 ТОЧКИ)



7 ЗАДАЧА (7 ТОЧКИ)



8 ЗАДАЧА (7 ТОЧКИ)



9 ЗАДАЧА (8 ТОЧКИ)


$$\text{Red Circle} + \text{Red Square} + \text{Red Triangle} = 9$$

$$\text{Red Circle} + \text{Red Square} = 6$$

$$\text{Red Pen} + \text{Red Triangle} = ?$$

$$\text{Red Pen} + \text{Red Triangle} = \square$$

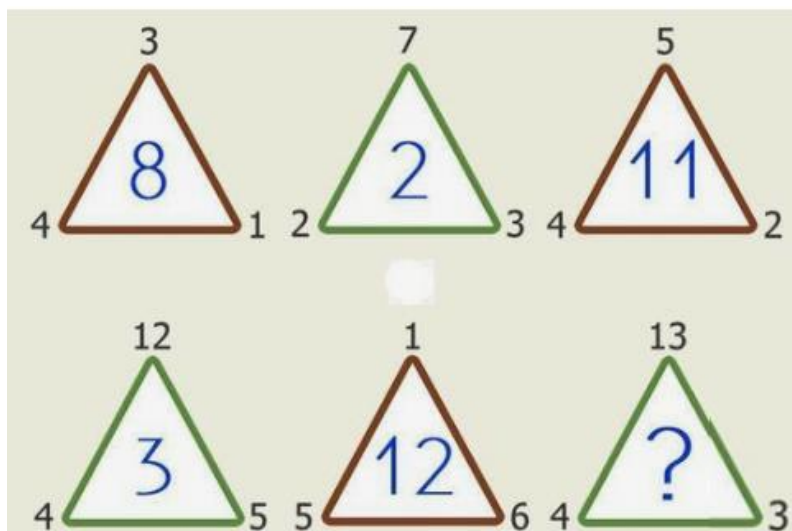
10 ЗАДАЧА (10 ТОЧКИ)



11 ЗАДАЧА (11 ТОЧКИ)

$$\begin{array}{r}
 \text{Apple} + \text{Apple} - \text{Apple} = 10 \\
 \text{Apple} + \text{Grapes} + \text{Grapes} = 20 \\
 \text{Grapes} - \text{Cherry} = 3 \\
 \text{Cherry} + \text{Apple} - \text{Grapes} = \square?
 \end{array}$$

12 ЗАДАЧА (12 ТОЧКИ)



УСПЕХ!